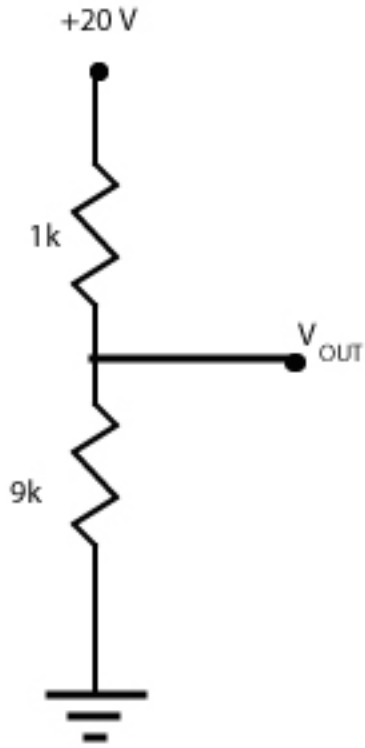
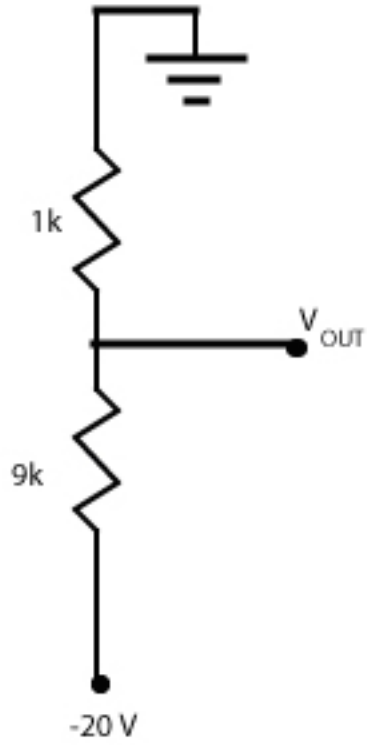


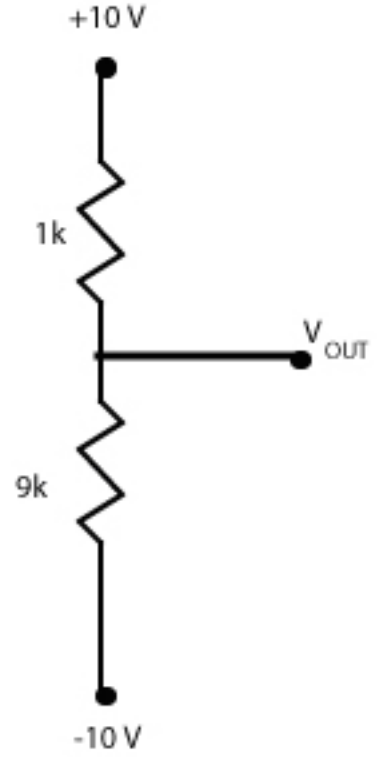
SP.764 Fall 04 - Problem Set 1



Circuit A



Circuit B



Circuit C

Calculate V_{OUT} for each circuit above. Please show your calculation.

Note: The voltage divider equation derived in class doesn't work for circuits B & C.

MIT OpenCourseWare
<http://ocw.mit.edu>

EC.S06 / EC.S11 Practical Electronics
Fall 2004

For information about citing these materials or our Terms of Use, visit: <http://ocw.mit.edu/terms>.